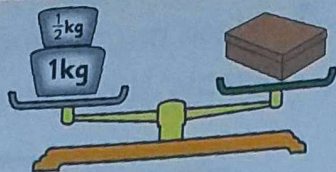


Monday

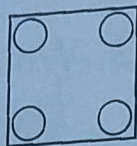
1. What is the weight of the box?



2. $37 + 42 =$

3. $78 - 40 =$

4. Tick the right angles in this shape.



5. How many legs have 4 horses?



6. Add these coins and write the answer using the euro sign.



7. I have 20c. How much more do I need to buy the pen?



8. 7 **tens** and 6 **units** = 6 **tens** and **units**

9. What time is it one hour earlier than the time shown?



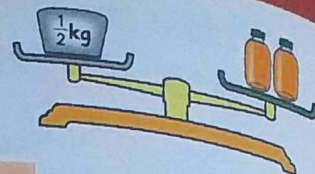
10. How many eggs in 7 trays, if there are 6 eggs in a tray?

11. Paul has 16 books. Shona has 19 books. How many more books do they need to have 40 books altogether?

12. Today is the 7th of May. What date was it 5 days ago?

Tuesday

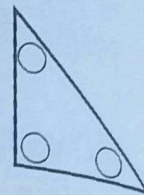
1. What is the weight of one bottle?



2. $64 + 22 =$

3. $69 - 31 =$

4. Tick the right angle in this shape.



5. How many legs have 6 ducks?



6. Add these coins and write the answer using the euro sign.



7. 4 **tens** and 5 **units** = 3 **tens** and **units**

8. What time is it one hour later than the time shown?



9. Measure this line. **cm**

10. How much change will I get from €2 if I spend 89c?

Brian has €2.

70c

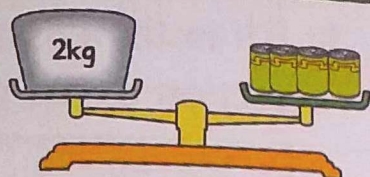


11. What is the greatest number of caps Brian can buy with €2?

12. How much change would Brian get if he bought as many caps as he could with €2?

Wednesday

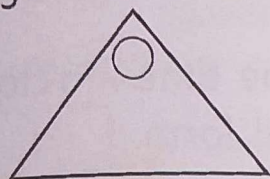
1. What is the weight of two tins?



2. $75 + 14 =$

3. $79 - 11 =$

4. Put a ✓ in the circle if it is a right angle and an ✗ if it is not.




5. How many legs have 3 lions?



6. 101, 102, 103, , 105

7. 6 **tens** and 8 **units** =
5 **tens** and **units**

8. What time is it 2 hours earlier than the time shown? :



9. How many bags of sugar make 5kg?



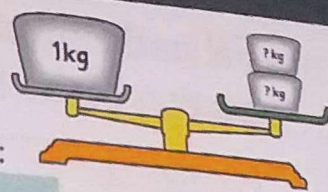
10. How much change will I get from €3 if I spend €1.50?

11. There are 5 people in a queue at the cinema. If they all pay €4, how much will they pay in total?

12. The baker uses 4 eggs to make a cake. How many cakes did he make with 20 eggs?

Thursday

1. Two of which weight balance the 1kg weight: $\frac{1}{4}$ kg or $\frac{1}{2}$ kg?



2. $25 + 64 =$

3. $79 - 23 =$

4. How many balloons are there?



5. How many eyes have eight owls?



6. Add these coins and write the answer using the euro sign.



7. 7 **tens** and 4 **units** =
6 **tens** and **units**

8. What time is it 2 hours later than the time shown? :



9. How many bags of flour add up to 4kg?



10. $9 + 9 + 9 + 9 =$

32 boys and 36 girls were playing on the yard.

11. How many children were on the yard altogether?

12. Half the boys and one quarter of the girls went inside. How many children were left on the yard?