



Mapping Skills Using Grids



by Diamond Mom



Battleship Game and Mapping

Use the following grid paper and play a game of Battleship with a friend. Use 2 different colors or X and O to distinguish between hits and misses.

To play, place your ships on your grid. See the plan below the grid to know how many spaces to use for each ship.

Call out the spaces by letter and number: For example A3.

If it is a space with a part of the ship in it, your partner will say "hit". Otherwise, he will say "miss." Color or mark the space with the appropriate color or letter.

Take turns until time is up or you sink your partner's ships.



You

	1	2	3	4	5	6	7	8
A								
B								
C								
D								
E								
F								
G								
H								

Your Partner

	1	2	3	4	5	6	7	8
A								
B								
C								
D								
E								
F								
G								
H								

Your Ships

A	A
---	---

B	B	B
---	---	---

C	C	C	C
---	---	---	---

D	D	D	D	D
---	---	---	---	---

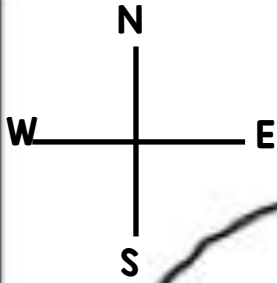
1

2

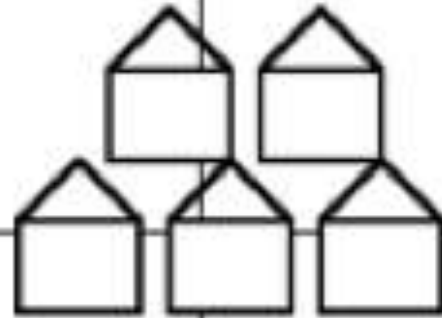
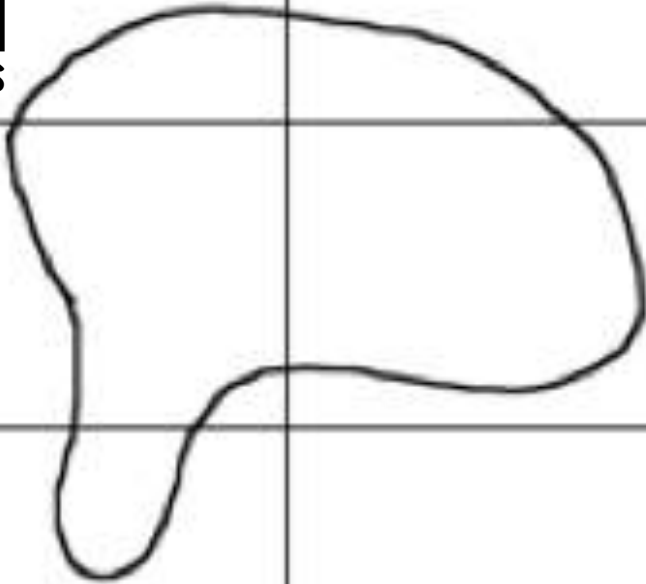
3

4


A



B



C



D



Legend



lake



village



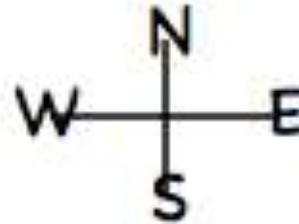
park



mountains







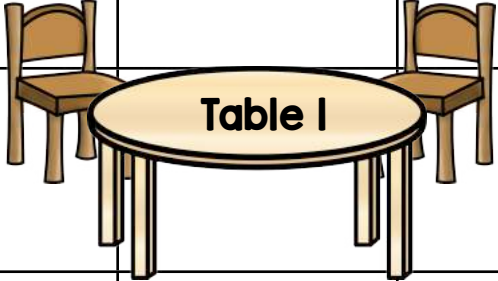
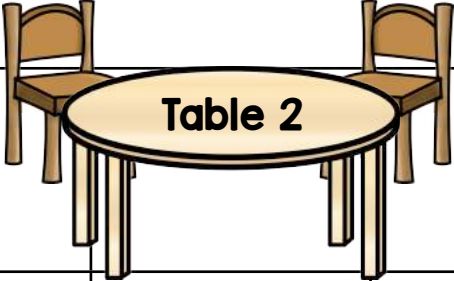
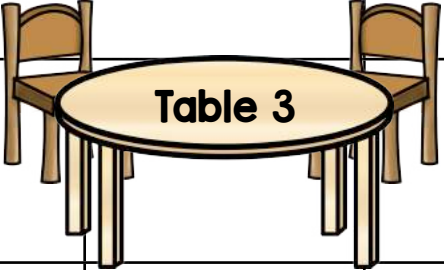
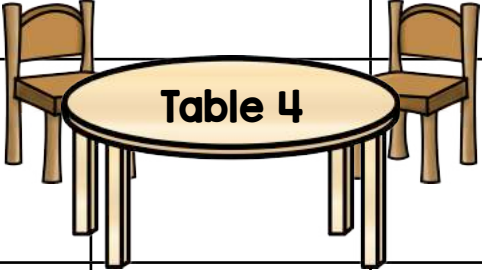
forest






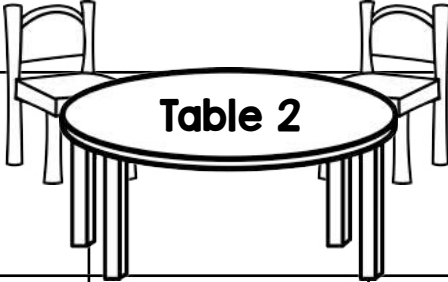




bridge


Grid Map Questions

- 1) What is located at B2?
- 2) What is located at A2?
- 3) What is located at C3?
- 4) What is located at D1?
- 5) What is located at D3?
- 6) Draw a bridge at C1.
- 7) Draw another small park at A1.

	1	2	3	4	5	6
A						
B						
C						
D						
E						
F						

	1	2	3	4	5	6
A						
B						
C						
D						
E						
F						


Legend




bookcase



chair 1



kidney table



oval table



chair 2

Classroom Grid Map

- 1) Where are the oval tables located?
- 2) What is in A1 and A2?
- 3) Where is the kidney table located?
- 4) How many chairs are there?
- 5) Add a teacher's desk in E6 and F6.

Thank You

Thank You for your purchase of this product. I hope you find it helpful.

Charlene/Diamond Mom

<https://www.teacherspayteachers.com/Store/Diamond-Mom>

<https://www.facebook.com/DiamondMomsTreasury>

<https://www.pinterest.com/iamdiamondmom/>

<http://diamondmomstreasury.weebly.com/blog>



Terms of Use:

This product is for single use in one classroom. If you wish to share, please purchase multiple licenses or direct others to purchase their own copies at my store.

All pages are protected by copyright. Please do not post any parts of this product on the internet without permission.

Graphics and Fonts By:



©Charlene Sequeira

Thank you for your purchase!



Click the links below to check out more of my products.



[Back to School](#)

[Money](#)

[Measurement](#)

[Geometry](#)

[Classroom Management](#)

[Holidays / Special Days](#)

[Sight Words](#)

[Social Studies projects](#)

[Bundles](#)

[Science](#)

[Self Esteem](#)

[Canadian products](#)