

Test 17 Time 1

1. What day comes just after Thursday?

2. What day comes just before Tuesday?

3. There are 4 seasons in a year – spring, summer, autumn and .

4. How many months are there in a year?

5.



May, and July are the months of summer.

6.




November, December and January are the months of .

7. The fifth month of the year is .

8. The seventh month of the year is .

9.



Ann's birthday is in the 6th month of the year. Name the month.

10.

Christmas Day is on the 25th of .




Test 18 Revision

1. How many days are there in three weeks?

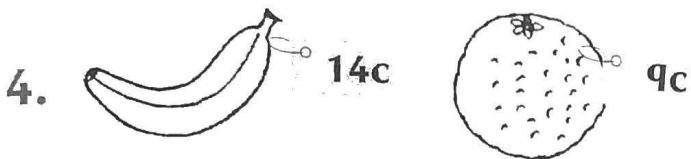
2. 70 71 72 73 74

Write the missing number.




There were 14 children on a team.
Half of them were boys.

How many were boys?



How much altogether for a
banana and an orange? c



9 sheep, 7 cows and 6 pigs.


How many animals altogether?




Brian has 38 cards.

Sue has 20 cards more than Brian.

How many cards has Sue?




How much would six lollipops cost? c



Joe had 36 cards. He lost 20 of them.


How many had he left?



There were 48 oranges in a box.

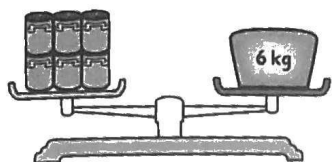
9 of them were bad.

How many good oranges were there?



How much for 2 oranges
and a banana? c

1. What is the weight of one tin? _____



2. $16 + \underline{\hspace{1cm}} + 2 = 25$

3. $\begin{array}{r} t\ u \\ 6\ 4 \\ 1\ 8 \\ + 3\ 2 \\ \hline \end{array}$

$\underline{\hspace{1cm}}$

4. How many legs have 4 dogs and 3 birds? _____



5. Write the value of: _____

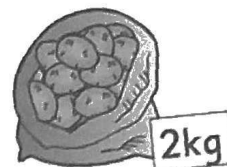


6. 3 tens and 7 units =
2 tens and _____ units

7. What time is it 2 hours later than the time shown on the clock? :




8. How many bags of potatoes add up to 10kg? _____



9. How much change will I get from €3 if I spend 65c? _____

10. Colour $\frac{1}{2}$ of the set.



11. Circle the odd number.

66 57 20

12. How many litres in 4 of these bottles? _____



Problems

13. A bar of chocolate costs 52c.
Claire has 19c.
How much more does she need to have enough to buy the bar of chocolate? _____

14. What is the difference between 79 and 24? _____

15. There were 47 apples on a tree.
19 fell off.
How many apples are still on the tree? _____

